

Name:

Week of: Dec. 14-18, 2009

HOMEWORK ASSIGNMENTS
3rd Grade

SUBJECT	MONDAY	TUESDAY	WEDNESDAY	THURSDAY	FRIDAY
MATH		DCR 2-12 EYT 3-3		DCR 2-13 EYT 3-4	
SPELLING LANGUAGE		Word Find in Composition Book		Winter Poem in Composition Book	Spelling Test
OTHER					

Reading: Read 20 minutes each night

Writing: Write a winter poem in your composition book and decorate the border.

Cursive: None this week

Spelling: Create a word find in composition book using words from your spelling list

Bonus Words: translation, reflection, rotation, congruent, perimeter
(Dictionary definitions turned in on Friday, know words by definition for test)

Spelling List

clock

large

page

mark

kitten

judge

crack

edge

pocket

brake

change

ridge

jacket

badge

orange

Challenge Words

freckles

advantage

pledge

Kentucky


kingdom

Name _____


Daily Cumulative Review

Write each time in two ways. (Lesson 2-11)

1.




2.




Write each time in two ways. (Lesson 2-10)

3.



4.



Mixed Review

Compare. Use $<$, $>$, or $=$.

5. $567 \bigcirc 576$
(2-6)

6. $1,340 \bigcirc 134$
(2-6)

7. $898 \bigcirc 898$
(2-6)

Order from greatest to least.

8. $1,576; 1,756; 675$ _____
(2-7)

9. $414; 4,114; 4,411$ _____
(2-7)

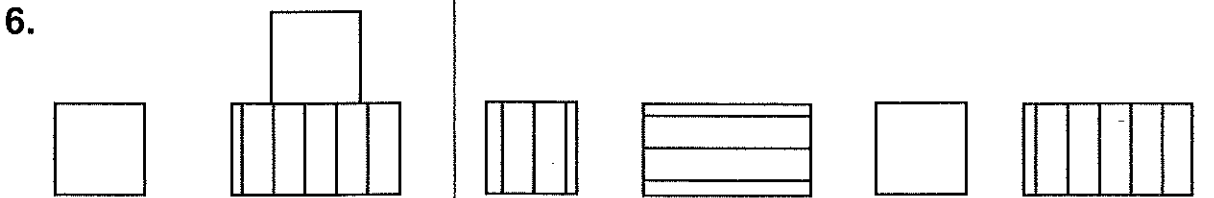
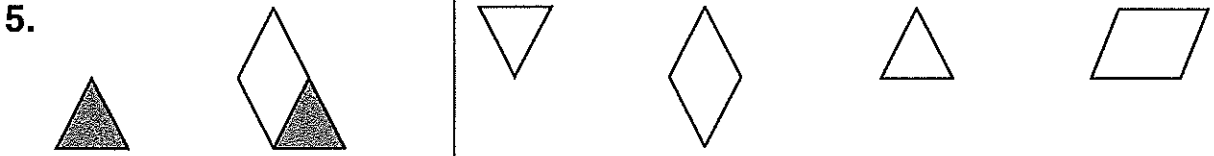
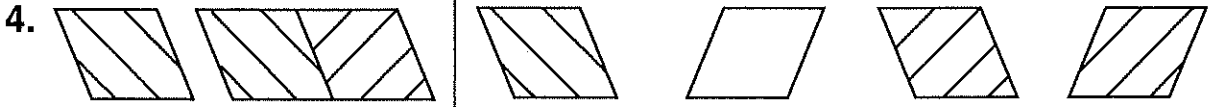
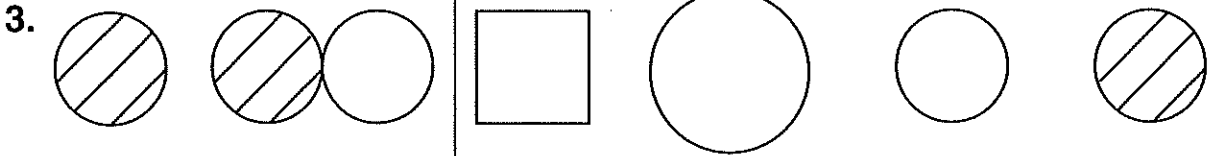
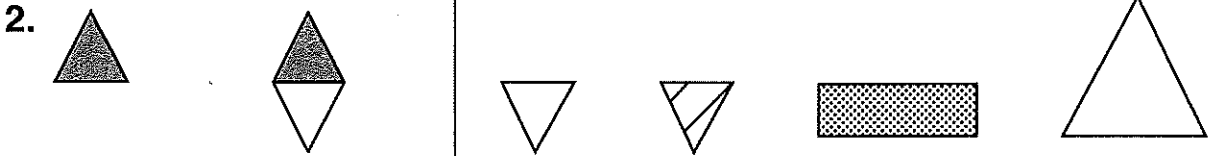
10. Erin was born in 1978. Greg was born in 1980. Heather was born in 1973. Suzanne wants to put them in order from oldest to youngest. Write the dates in order.
(2-7)

Name _____

Extend Your Thinking
3-3

Visual Thinking


Choose the shape that can be added to the first shape to make the second shape. Circle your choice.



Daily Cumulative Review


Write each time two ways. Write A.M. or P.M. (Lesson 2-12)

1.



art
class


2.




piano
lesson

Write each time two ways. (Lesson 2-11)

3.



4.



Mixed Review

5. How many minutes are between 9:40 and 9:55? _____
(2-10)

6. Suppose it's 3:15. What time will it be 15 minutes later? _____
(2-10)

Write each number in standard form.

7. three thousand, twenty-seven _____
(2-3)

8. nine thousand, four hundred one _____
(2-3)

9. one thousand, one _____
(2-3)

10. seven thousand, seven hundred seventy-seven _____
(2-3)

11. four thousand, forty _____
(2-3)

Decision Making

Your Little League team wants to buy new uniforms and new equipment. There are 18 players on your team. Your coach has created a list with packages of different items and their costs. However, the team will only buy 2 packages on the list.

Packages of:	Total Cost
18 baseball caps	\$63
2 dozen t-shirts	\$76
18 pairs of socks	\$24
18 sweatshirts	\$81
6 baseballs	\$39
4 bats	\$45

1. a. What are the 2 most expensive packages on the list?

b. About how much is their total cost? _____

2. a. Which 2 packages on the list could be purchased for about \$65?

b. What are their total costs? _____

3. There are other things besides cost to consider when making your decision. What questions would you ask to help you choose the two packages? List two questions below.

Question 1: _____

Question 2: _____

4. Do you have enough information to make a decision? Explain.

5. Choose two packages to buy. Tell how much they cost and why you chose them.

